

The King's University  
Department of Music  
Music Theory Competency Assessment

Applicant's Name \_\_\_\_\_


Date \_\_\_\_\_

For all items, type a hashtag (e.g., C#) for a sharp, a lowercase b (e.g., Bb) for a flat, and an x (e.g., Fx) for a double-sharp.


I. Note Names and Key Signatures

For each example, identify the Major key with a capital letter, the minor key with a lower case letter, and name the note, according to the given clefs and key signatures.

example:




C Maj.  
a min.      B




\_\_\_\_ Maj.  
\_\_\_\_ min.      \_\_\_\_



\_\_\_\_ Maj.  
\_\_\_\_ min.      \_\_\_\_




\_\_\_\_ Maj.  
\_\_\_\_ min.      \_\_\_\_



\_\_\_\_ Maj.  
\_\_\_\_ min.      \_\_\_\_



\_\_\_\_ Maj.  
\_\_\_\_ min.      \_\_\_\_



\_\_\_\_ Maj.  
\_\_\_\_ min.      \_\_\_\_



\_\_\_\_ Maj.  
\_\_\_\_ min.      \_\_\_\_



\_\_\_\_ Maj.  
\_\_\_\_ min.      \_\_\_\_



\_\_\_\_ Maj.  
\_\_\_\_ min.      \_\_\_\_



\_\_\_\_ Maj.  
\_\_\_\_ min.      \_\_\_\_



\_\_\_\_ Maj.  
\_\_\_\_ min.      \_\_\_\_

II. Scales

Name these scales:

1) \_\_\_\_\_



2) \_\_\_\_\_



3) \_\_\_\_\_



III. Intervals

Name each of the following intervals by number and quality.

(use the letters M m P A d for Major, minor, Perfect, Augmented, and diminished)

- a)                      b)                      c)                      d)                      e)                      f)                      g)                      h)

\_\_\_\_\_

- i)                      j)                      k)                      l)                      m)                      n)                      o)                      p)

\_\_\_\_\_

Which of the intervals above is an inversion of item d) ? \_\_\_\_\_ Which is an inversion of item f) ? \_\_\_\_\_

IV. Chords

Name each of the following chords by its root, quality, and inversion. e.g., C m

(use M m A dim. half-dim. dom. for qualities)

2nd inv.

D dim7  
root pos.

- a)                      b)                      c)                      d)                      e)                      f)                      g)                      h)

\_\_\_\_\_

\_\_\_\_\_